




Draw a composite rectilinear shape (not to scale) with an area of



For every  children in a school there are 0.125 adults. How many adults are in the school?

Multiply  by 43

 ml = l


 miles = km



(Number range 1000 +)

True or False

25% of  is less than 35% of $\frac{1}{2}$ of 

 multiplied by the last two digits of 