




Draw a shape (not to scale) where

 is the perimeter.

What fractions of  can you find?


-

Multiply 2 or more digits from  to
make a product closest to 50

Create a word problem
where  is the answer



(Number range 3 -
digit numbers)

Make  with coins in different ways

It would take
minutes to

