

 cm = _____ m

 minutes = _____ hours

 10ps = £ _____

Divide  by 10


Divide  by 100

Th	H	T	O	.	Tth	Hth
----	---	---	---	---	-----	-----


Draw a rectilinear shape (not to scale) with the perimeter of




(Number range 3 - digit numbers)

 $\div 8 =$

Use short division

Write a column addition calculation where  is the answer

 is the answer, what is the question?