

# Maths Picture Puzzle 1

Each of the objects in the grid represents a number from 1 to 9.

The numbers on the right and the bottom of the grid are the **totals** you would get if you were to **add** the numbers represented by each object together in the row or column.

Can you use this information to work out which number each object represents?!



				<b>26</b>
				<b>16</b>
				<b>27</b>
				<b>23</b>
				<b>24</b>
				<b>10</b>
<b>26</b>	<b>37</b>	<b>36</b>	<b>27</b>	

	=
	=
	=
	=
	=
	=
	=
	=
	=








# Maths Picture Puzzle 2










Each of the objects in the grid represents a number from 1 to 9.

The numbers on the right and the bottom of the grid are the **totals** you would get if you were to **add** the numbers represented by each object together in the row or column.

Can you use this information to work out which number each object represents?!












				<b>24</b>
				<b>17</b>
				<b>22</b>
				<b>20</b>
				<b>19</b>
				<b>32</b>
<b>39</b>	<b>45</b>	<b>33</b>	<b>17</b>	

	=
	=
	=
	=
	=
	=
	=
	=
	=

## Maths Picture Puzzle 1 ANSWERS

Here are the  
answers to my  
picture puzzle -  
how did you do?!












	= 5
	= 9
	= 4
	= 8
	= 3
	= 7
	= 2
	= 6
	= 1

## Maths Picture Puzzle 2 ANSWERS

Here are the  
answers to my  
picture puzzle -  
how did you do?!



	= 5
	= 4
	= 6
	= 3
	= 7
	= 2
	= 8
	= 1
	= 9